

# Y6 SATs

# Translate

# a Shape

# BOOSTER

Help Code : 042

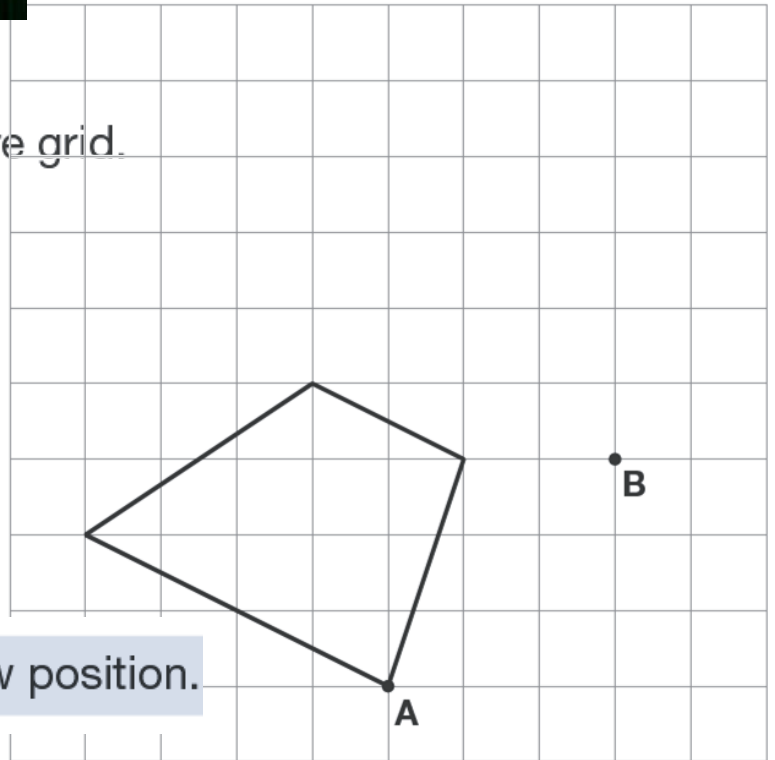
**RECOMMENDED!** - mental maths TES resource  
Interactive + Self-Marking [CLICK HERE](#)

Here is a quadrilateral on a square grid.

The quadrilateral is translated  
so that point **A** moves to point **B**.



2010A KS2 Q24

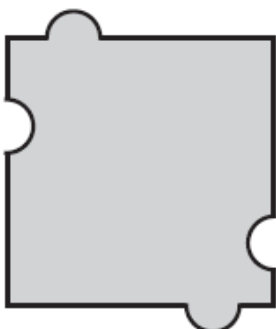
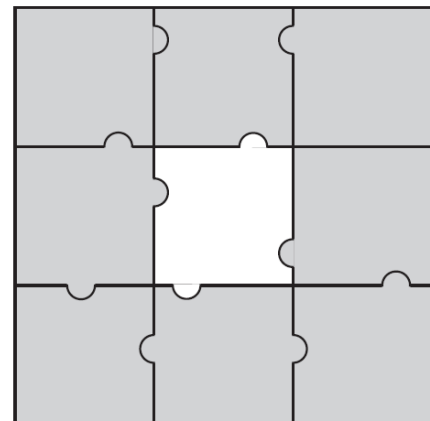


Draw the quadrilateral in its new position.


2000A KS2 Q3

Here is a jigsaw with one piece **missing**.


Which **one** of the pieces below fits the hole in the middle?



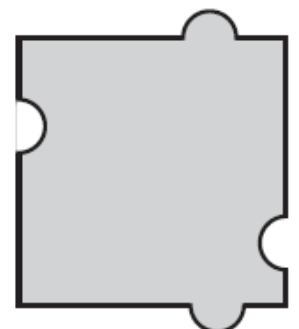
A



B



C



D

